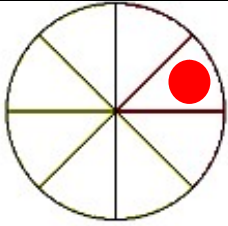
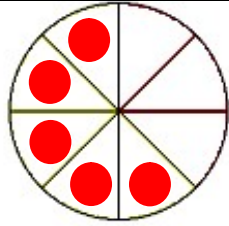


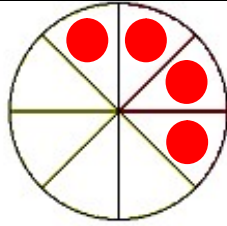
Entraînement 1 : Colorie dans chaque cas la fraction de la figure



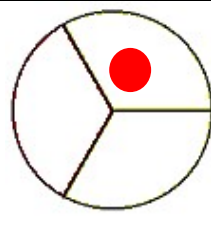
Fraction : $\frac{1}{8}$



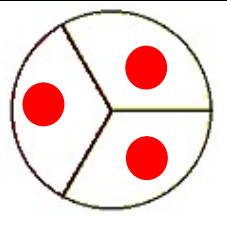
Fraction : $\frac{5}{8}$



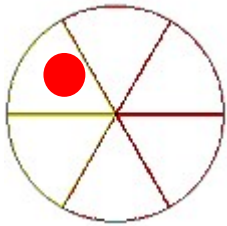
Fraction : $\frac{4}{8}$



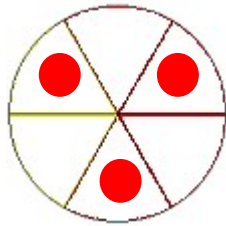
Fraction : $\frac{1}{3}$



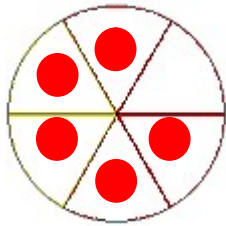
Fraction : $\frac{3}{3}$



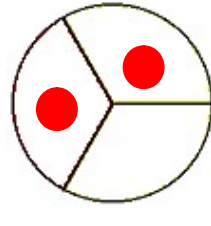
Fraction : $\frac{1}{6}$



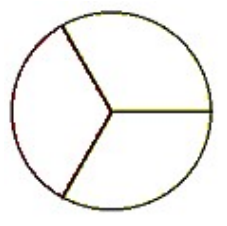
Fraction : $\frac{3}{6}$



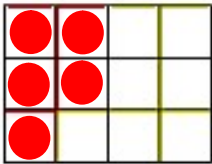
Fraction : $\frac{5}{6}$



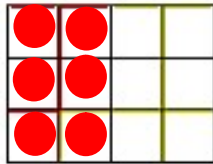
Fraction : $\frac{2}{3}$



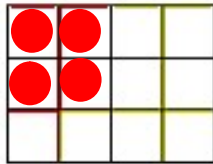
Fraction : $\frac{0}{3}$



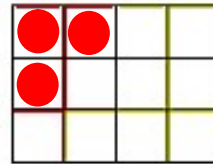
Fraction : $\frac{5}{12}$



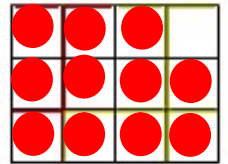
Fraction : $\frac{6}{12}$



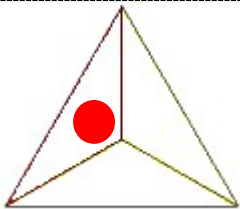
Fraction : $\frac{4}{12}$



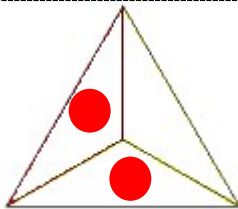
Fraction : $\frac{3}{12}$



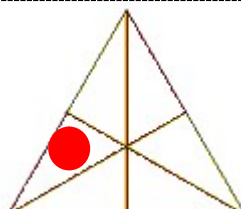
Fraction : $\frac{11}{12}$



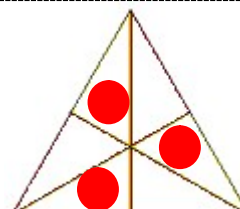
Fraction : $\frac{1}{3}$



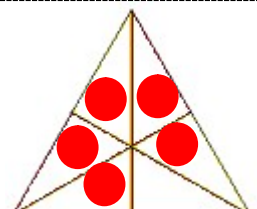
Fraction : $\frac{2}{3}$



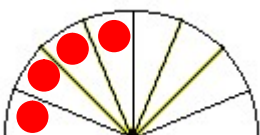
Fraction : $\frac{1}{6}$



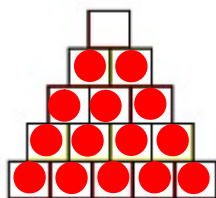
Fraction : $\frac{3}{6}$



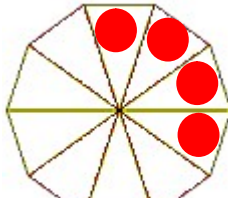
Fraction : $\frac{5}{6}$



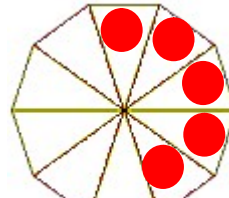
Fraction : $\frac{4}{8}$



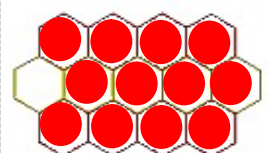
Fraction : $\frac{14}{15}$



Fraction : $\frac{4}{10}$



Fraction : $\frac{5}{10}$



Fraction : $\frac{12}{13}$

