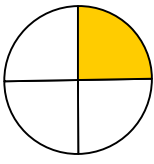
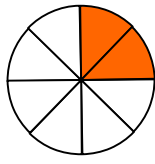
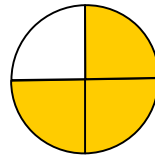


**Entraînement 1** Complète avec le bon numérateur


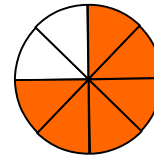
$$\frac{\underline{1}\dots}{4}$$



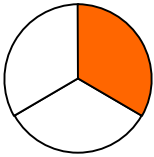
$$\frac{\underline{2}\dots}{8}$$



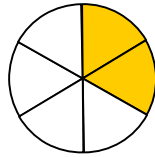
$$\frac{\underline{3}\dots}{4}$$



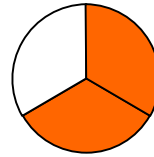
$$\frac{\underline{6}\dots}{8}$$



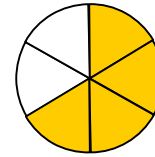
$$\frac{\underline{1}\dots}{3}$$



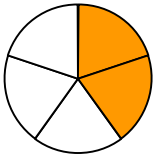
$$\frac{\underline{2}\dots}{6}$$



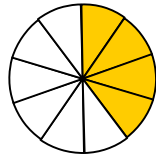
$$\frac{\underline{2}\dots}{3}$$



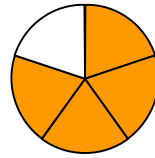
$$\frac{\underline{4}\dots}{6}$$



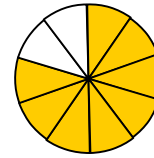
$$\frac{\underline{2}\dots}{5}$$



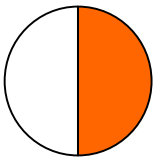
$$\frac{\underline{4}\dots}{10}$$



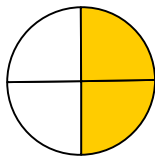
$$\frac{\underline{4}\dots}{5}$$



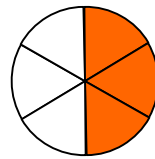
$$\frac{\underline{8}\dots}{10}$$



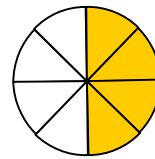
$$\frac{\underline{1}\dots}{2}$$



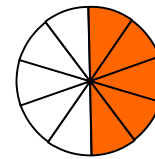
$$\frac{\underline{2}\dots}{4}$$



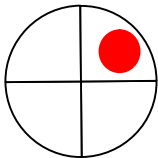
$$\frac{\underline{4}\dots}{6}$$



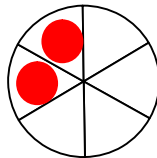
$$\frac{\underline{4}\dots}{8}$$



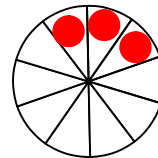
$$\frac{\underline{5}\dots}{10}$$

 **Entraînement 2** Colorie la fraction du disque


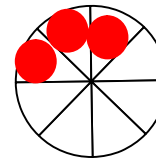
$$\frac{1}{2}$$



$$\frac{2}{3}$$



$$\frac{3}{5}$$



$$\frac{3}{4}$$

 **Entraînement 3** Complète avec le bon numérateur

$$\frac{1}{2} = \frac{\underline{2}\dots}{4}$$

$$\frac{1}{2} = \frac{\underline{3}\dots}{6}$$

$$\frac{1}{2} = \frac{\underline{5}\dots}{10}$$

$$\frac{1}{3} = \frac{\underline{2}\dots}{6}$$

$$\frac{2}{3} = \frac{\underline{4}\dots}{6}$$

$$\frac{1}{5} = \frac{\underline{2}\dots}{10}$$

$$\frac{2}{5} = \frac{\underline{4}\dots}{10}$$

$$\frac{1}{4} = \frac{\underline{2}\dots}{8}$$

$$\frac{2}{3} = \frac{\underline{8}\dots}{12}$$

$$\frac{1}{5} = \frac{\underline{3}\dots}{15}$$

$$\frac{2}{5} = \frac{\underline{6}\dots}{15}$$

$$\frac{1}{4} = \frac{\underline{3}\dots}{12}$$

